

Name: _____

Pupil Sheet **58**

7 cm

4 cm

1 cm

9 cm

5 cm

6 cm

Perimeter = 32 cm

8 cm

3 cm

3 cm

2 cm

5.5 cm

5.5 cm

3 cm

Perimeter = 33 cm

6.5 cm

2 cm

4 cm

2 cm

8 cm

4 cm

4 cm

6.5 cm

Perimeter = 37 cm

5 cm

9.5 cm

3 cm

3 cm

3.5 cm

7 cm

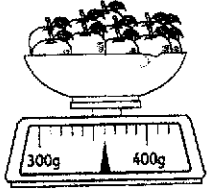
Perimeter = 31 cm

New Mathematics Practice 3 © HMCo 2007
Copyright reserved for purchasing schools only.
This material is not to be reproduced.


Name: _____

Pupil Sheet **59**

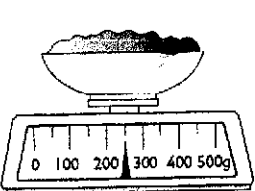
Write each weight in grams (g).



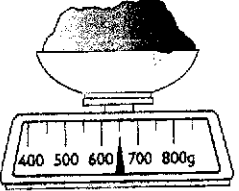
360 g



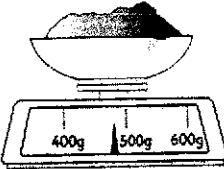
230 g



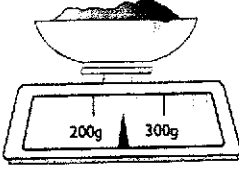
250 g



650 g



480 g




240 g

New Mathematics Practice 3 © HMCo 2007
Copyright reserved for purchasing schools only.
This material is not to be reproduced.

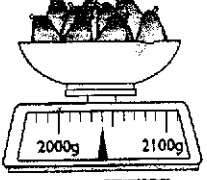
Name: _____

Pupil Sheet **60**

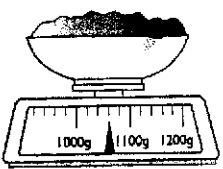
Write each weight in kg and g.



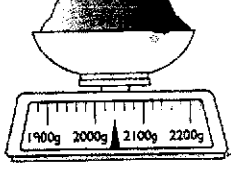
1 kg 70 g



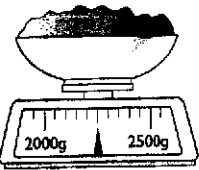
2 kg 40 g



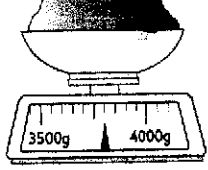
1 kg 60 g



2 kg 40 g



2 kg 250 g



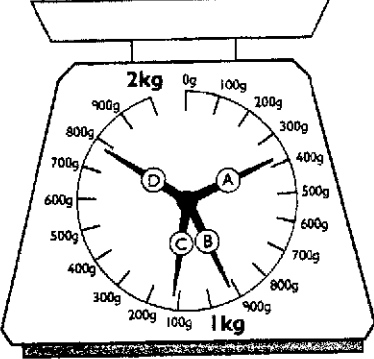
3 kg 800 g

New Mathematics Practice 3 © HMCo 2007
Copyright reserved for purchasing schools only.
This material is not to be reproduced.

Name: _____

Pupil Sheet **61**

1 Write each weight to the nearest 100g.




(A) 400 g

(B) 900 g

(C) 1100 g

(D) 1800 g

2 Write each weight to the nearest 50g.



(W) 250 g

(X) 600 g

(Y) 1150 g

(Z) 1500 g

New Mathematics Practice 3 © HMCo 2007
Copyright reserved for purchasing schools only.
This material is not to be reproduced.