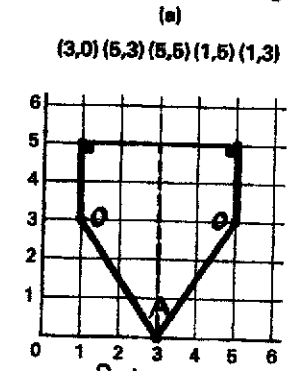


# PG Answers

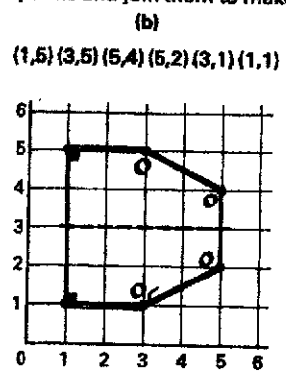
13

## Co-ordinates

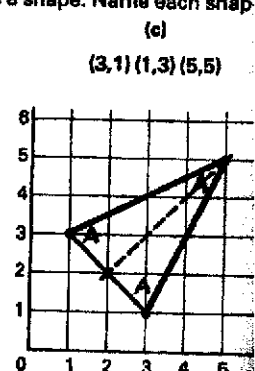
1 On each grid, mark the given points and join them to make a shape. Name each shape.



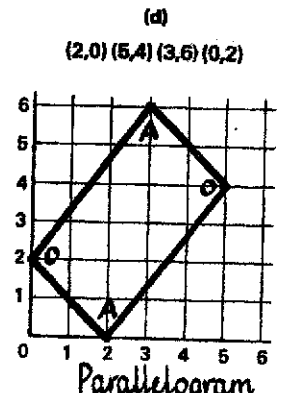
Shape: Pentagon



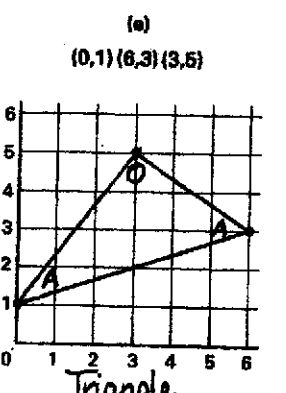
Shape: Hexagon



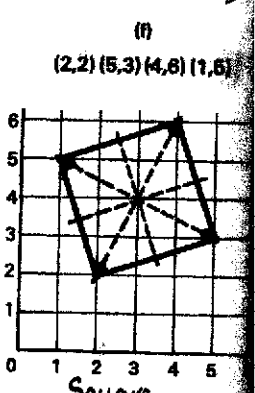
Shape: Isosceles triangle



Shape: Parallelogram



Shape: Triangle



Shape: Square

2 For each shape above:

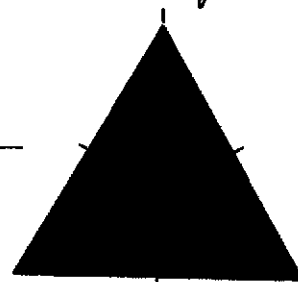
(a) Colour the sides to show which are equal.

(b) Mark the angles like this:



(c) Draw any lines of symmetry.

3 Repeat question 2 for this equilateral triangle.



Go back to Textbook Page 88, question 3.