



Name: _____

Pupil Sheet **62**


1 How many millilitres of liquid are in each jar?




600 ml



850 ml




240 ml




130 ml

2 Colour to show the volume of liquid in each jar.


700 ml




450 ml



370 ml



290 ml



Volume/Capacity • Scales with 100ml, 50ml, 20ml, 10ml divisions

New Mathematics Maths 5 & 6 (2012) 2011
Copying prohibited for purchasing school only
This material is not copyright free.

NB. There are no 'set' answers for PUPIL SHEET 63 as it is a template. For Q1 Parents have to shade in the quantity on each jar.

For Q2 parents have to specify the amount to be coloured \therefore there will be different answers in different households.