




P7 ASSESSMENT BOOK  
13.  
(Answers)




Topic Assessment **13**  
Volume

Name: \_\_\_\_\_

**1** Write the capacity of each container  
• in millilitres

 330 ml      1150 ml      110 ml

• in centilitres.

 60 cl      90 cl      9 cl

**2** Tick (✓) the greater volume     • the smaller volume



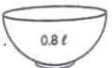


0.6 l      66 cl      5 cl      45 ml

**3** Write in order. Start with the **smallest** volume.

$\frac{7}{10}$  l      7 cl      707 ml      77 cl      7 l





7 cl,  $\frac{7}{10}$  l, 707 ml, 77 cl, 7 l

**4** Tick (✓) the containers with a capacity greater than 55 cl and smaller than 75 cl.

**5** Colour each scale to show the given volume.

55 cl     28 cl     4 cl     63 cl

© Pearson Education Inc. or its affiliate(s). All rights reserved. This material is not to be redistributed.