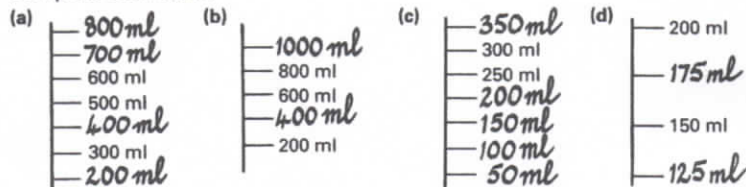


P6 Workbook Pg. 4 (Answers)


Fruit Punch

1 Here are parts of scales on containers which measure volume. Complete each scale.

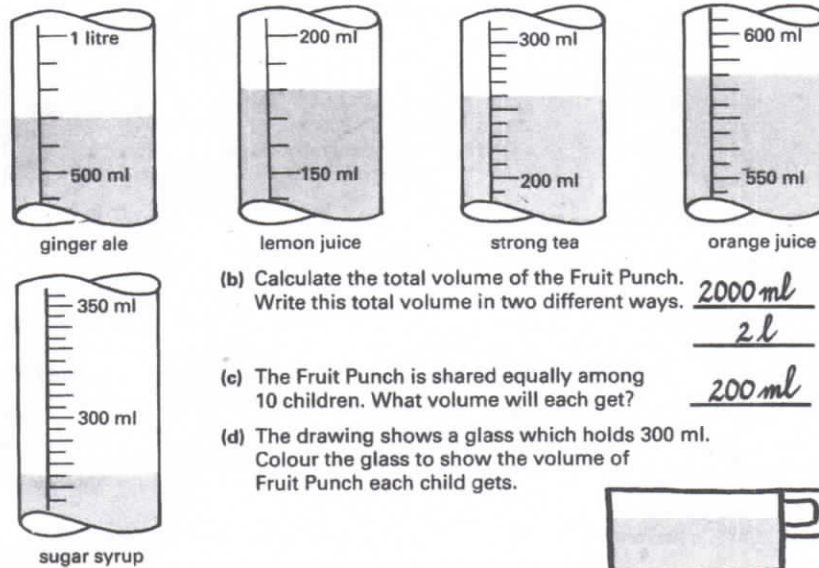


2 Go back to Textbook Page 23, question 6.

3

Party Fruit Punch		
700 ml ginger ale		585 ml orange juice
180 ml lemon juice		275 ml sugar syrup
260 ml strong tea		lemon slices

(a) Colour the volumes of the ingredients for this Fruit Punch.



Go back to Textbook Page 25, question 4.