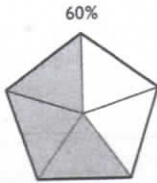

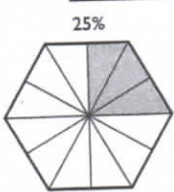

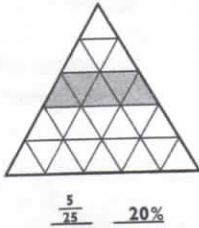
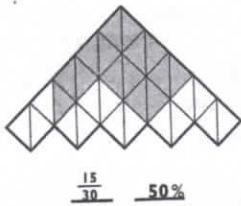
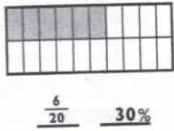
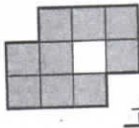


Name:

1 Colour.



2 For each shape, write the amount shaded as a fraction and as a percentage.



Name:

1 Write as a fraction and as a percentage.

53 out of 100 $\frac{53}{100}$ 53% 45 out of 90 $\frac{1}{2}$ 50%
200 out of 800 $\frac{1}{4}$ 25% 100 out of 1000 $\frac{1}{10}$ 10%

2 Find

40% of 50 80% of 60 100% of 300.
20 48 300

3 Write as a percentage.

6 out of 60 18 out of 30 28 out of 56.
10% 60% 50%

4



60% of this 2 metre anchor chain is rusted.

What length of Alf's chain is rusted? 1.2 m

5

Find $\cdot 15\%$ of 80 12 $\cdot 12\frac{1}{2}\%$ of 1200. 150

6 Write in two other ways.

79% 0.79 $\frac{79}{100}$ $\frac{3}{20}$ 15% 0.15
0.18 $\frac{18}{100}$ 18% 3% 0.03 $\frac{3}{100}$

7 Write in order, starting with the **smallest** number.

(7) (0.7) (77%) ($\frac{7}{100}$) (77)

$\frac{7}{100}$, 0.7, 77%, 7, 77