

3

To the nearest thousand

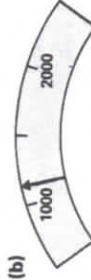
1 Complete each sentence:



The pointer shows 4000 to the nearest thousand.



The pointer shows 5000 to the nearest thousand.



The pointer shows 1000 to the nearest thousand.

2 Draw the pointer on each diagram and complete the sentence:



The pointer shows 5000 to the nearest thousand.



The pointer shows 4000 to the nearest thousand.



The pointer shows 7000 or 7000 to the nearest thousand.



The pointer shows 8790 to the nearest thousand.



The pointer shows 4160 to the nearest thousand.



The pointer shows 3333 or 3000 to the nearest thousand.



This car has travelled 47 251 km.
47 251 is between 47 000 and 48 000.
It is 47 000 to the nearest thousand kilometres. *(Any number between 3000 and 3500 with the pointer placed appropriately.)*

3 Complete the sentences about these distances:

(a) 23 356 is between 23 000 and 24 000, or 23 000 to the nearest thousand km.

(b) 8293 is between 8000 and 9000, or 8000 to the nearest thousand km.

(c) 37 098 is between 37 000 and 38 000, or 37 000 to the nearest thousand km.

(d) 51 807 is between 51 000 and 52 000, or 52 000 to the nearest thousand km.

(e) 9760 is between 9000 and 10 000, or 10 000 to the nearest thousand km.

(f) 99 943 is between 99 000 and 100 000, or 100 000 to the nearest thousand km.


Go to Textbook Page 5.

2

To the nearest hundred

● is between 200 and 300. It is nearer 300.

It is 300 to the nearest hundred.



1 Complete each number line and each sentence.



(a) 400 470 is between 400 and 500, or 500 to the nearest hundred.




(b) 300 320 is between 300 and 400, or 300 to the nearest hundred.



(c) 800 800 is between 800 and 900, or 900 to the nearest hundred.




(d) 1400 1400 is between 1400 and 1500, or 1400 to the nearest hundred.



(e) 2700 2700 is between 2700 and 2800 or 2800 to the nearest hundred.

● is between 1200 and 1300. It is nearer 1200.

It is 1200 to the nearest hundred.



2 Complete each number line and each sentence.



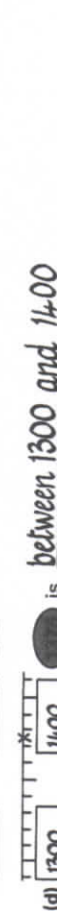
(a) 1400 1400 is between 1400 and 1500, or 1400 to the nearest hundred.



(b) 2800 2800 is between 2800 and 2900, or 2900 to the nearest hundred.



(c) 4700 4700 is between 4700 and 4800, or 4800 to the nearest hundred.



(d) 1300 1300 is between 1300 and 1400 or 1400 to the nearest hundred.



(e) 3900 3900 is between 3900 and 4000 or 3900 to the nearest hundred.

Go back to Textbook Page 4, question 6.