








Match.

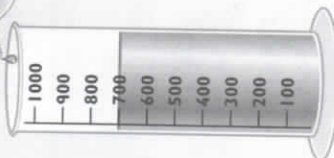
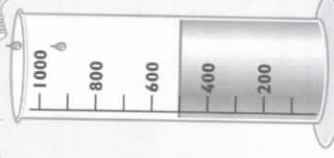

		
35 minutes past 9	40 minutes past 12	10 minutes to 7
20 minutes to 1	50 minutes past 6	25 minutes to 10

Write each time.

	
50 minutes past 2	40 minutes past 7
10 minutes to 3	20 minutes to 8
	
35 minutes past 5	55 minutes past 2
25 minutes to 6	5 minutes to 3




Time: minutes past/to the hour

Complete the label on each bottle.

		
Cola 700 millilitres	Strawberry 500 millilitres	Bubblegum 400 millilitres

Which bottle contained  $\frac{1}{2}$  litre Strawberry more than  $\frac{1}{2}$  litre? Cola less than  $\frac{1}{2}$  litre Bubblegum

Colour the jars to show the fruit juice.

		
Lemon 600 millilitres	Orange 300 millilitres	Lime 900 millilitres

Capacity: millilitres