
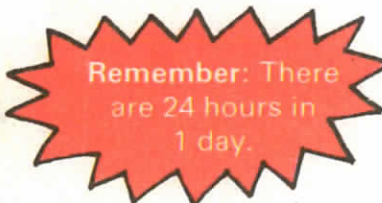


24-hour times

Some clocks and watches show 24-hour times. Roy's watch is a 24-hour digital watch.



At 9 am Roy's watch shows **09:00**
This time is written 09.00

At 4 pm Roy's watch shows **16:00**
This time is written 16.00

Look at these times:

12-hour time	11 am	12 noon	1 pm	2 pm
24-hour time	11.00	12.00	13.00	14.00

1 Write each time as a 24-hour time.

- (a) 7 am (b) 3 pm (c) 5 pm (d) 2 am (e) 4 pm (f) 11 pm
(g) 9 pm (h) 6 am (i) 3 am (j) 10 am (k) 8 pm (l) 1 am

2 Write each time as a 12-hour time, using am or pm.

- (a) 04.00 (b) 18.00 (c) 09.00 (d) 22.00 (e) 19.00 (f) 01.00
(g) 20.00 (h) 12.00 (i) 10.00 (j) 05.00 (k) 08.00 (l) 17.00

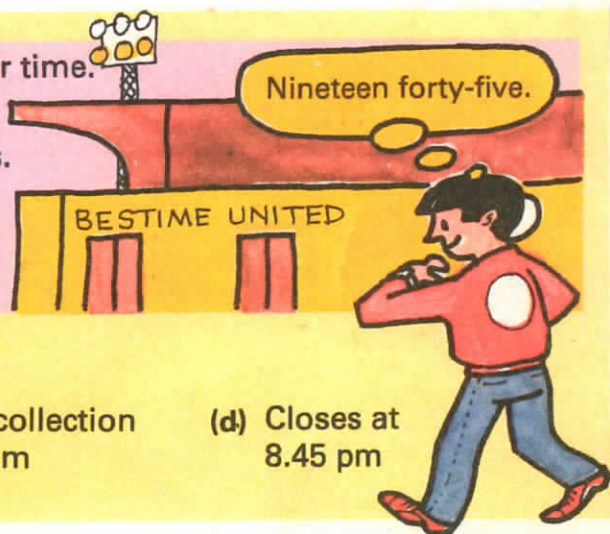

Kick-off 7.45 pm

Bestime United
v
Midwatch

Cup - 3rd round

This time is 19.45 as a 24-hour time.

Remember: Four figures are always used for 24-hour times.



3 Change each time to a 24-hour time.

- (a) Coach leaves 9.30 am (b) Film starts 6.20 pm (c) Next collection 8.15 am (d) Closes at 8.45 pm

13:50 is written as **1.50 pm** or **ten minutes to two** in the afternoon.

4 Change each time to a 12-hour time, using am or pm.

(a) (b) (c) (d)

5 Find each missing time.

24-hour time	09.15	17.55	(b)	(c)	23.45	(e)	01.10	21.05	03.50
12-hour time	9.15 am	(a)	8.25 pm	4.05 am	(d)	10.20 pm	(f)	(g)	(h)