










Name: _____ Check-up **25**

Write these times using
o'clock or half past or quarter past or quarter to

 half past nine	 quarter to twelve	 quarter past 5
 8 o'clock	 quarter to six	 quarter past 4

Write these times.

Half past one. 1.30 Quarter to five. 4.45

 <u>4.00</u>	 <u>12.15</u>	 <u>2.45</u>
---	--	---

Write these times in order starting with the earliest.





11.15 pm Six thirty in the morning. Quarter to two in the afternoon. 9.00 am

6.30 am 9.00 am 1.45 pm 11.15 pm




Time: Textbook pages 98-100 New Mathematics 3 © 2002, 2007

Name: _____ Check-up **26**

Write each time using minutes past or minutes to.

 <u>10 minutes to 8</u>	 <u>25 minutes past 11</u>
 <u>10 minutes past 5</u>	 <u>5 minutes to 9</u>





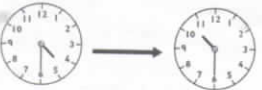

Write each time.


 <u>9.20</u>	 <u>2.35</u>	 <u>12.05</u>
<u>10 minutes past 10</u> <u>10.10</u>	<u>20 minutes to 12</u> <u>11.40</u>	
<u>25 minutes past 2</u> <u>2.25</u>	<u>5 minutes to 6</u> <u>5.55</u>	


Time: Activity Book pages 34-35, Textbook pages 101-102 New Mathematics 3 © 2002, 2007

Name: _____ Check-up **27**

How long?

 <u>45</u> minutes	 <u>20</u> minutes
 <u>35</u> minutes	 <u>35</u> minutes
 <u>6</u> hours	 <u>4</u> hours

start  finish 12:20
35 minutes

Gary left home at 10.05 am.
He returned at 1.05 pm.
How long was he away? 3 hours 

Time: Activity Book page 36, Textbook pages 103-104 New Mathematics 3 © 2002, 2007

Name: _____ Topic Assessment **1a**
Numbers to 1000

1 Complete.

8	10	12	14	16	18	20	22	24	26	28
50	45	40	35	30	25	20	15	10	5	0
0	4	8	12	16	20	24	28	32	36	40
36	33	30	27	24	21	18	15	12	9	6

2 Write the number

after 643 644 after 299 300
before 735 734 before 400 399
between 832 and 830 831 between 599 and 601 600

3 Write the number

1 less than 756 755 one more than 499 500
2 more than 438 440 two less than 501 499
10 more than 297 307 ten less than 615 605
100 less than 179 79 one hundred more than 900 1000

4

$349 + 30 =$ <u>379</u>	$673 - 50 =$ <u>623</u>
$261 + 400 =$ <u>661</u>	$558 - 500 =$ <u>58</u>
$824 +$ <u>70</u> $= 894$	$296 -$ <u>50</u> $= 246$
$342 +$ <u>200</u> $= 542$	$1000 -$ <u>700</u> $= 300$

New Mathematics 3 © 2002, 2007