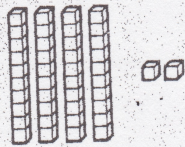
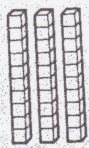


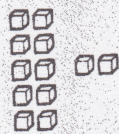
Divide 42 by 3:



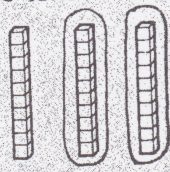
When you divide 4 tens by 3, 1 ten is left over, so: change 1 ten to 10 units



3 tens ÷ 3



12 units ÷ 3



1 ten



4 units

$$\begin{array}{r} 14 \\ 3 \overline{)42} \end{array}$$

Divide 65 flowers equally among 5 flower beds. How many flowers in each bed?

65 flowers $\begin{array}{r} \\ \overline{)65} \end{array}$

5 beds $\begin{array}{r} \\ \overline{)65} \end{array}$

13 flowers in each bed. $\begin{array}{r} 13 \\ \overline{)65} \end{array}$

Dice are packed in fours. How many packs can be made with 96 dice?

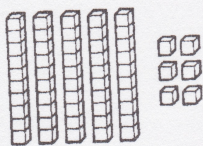
96 dice $\begin{array}{r} \\ \overline{)96} \end{array}$

4 in each pack $\begin{array}{r} \\ \overline{)96} \end{array}$

24 packs can be made. $\begin{array}{r} 24 \\ \overline{)96} \end{array}$

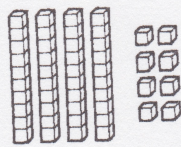
A How many in each group if you divide these tens and units into:

☆ 2 equal groups?

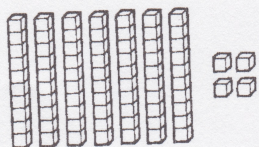


$$\begin{array}{r} 28 \\ 2 \overline{)56} \end{array}$$

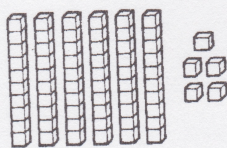
1 3 equal groups?



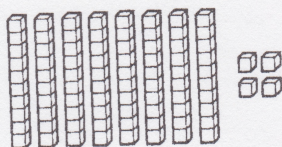
2 2 equal groups?



3 5 equal groups?



4 7 equal groups?



B Copy and complete:

☆ $3 \overline{)78}$

$$\begin{array}{r} 26 \\ 3 \overline{)78} \end{array}$$

1 $3 \overline{)45}$

4 $2 \overline{)96}$

7 $2 \overline{)76}$

2 $4 \overline{)52}$

5 $7 \overline{)84}$

8 $3 \overline{)78}$

3 $5 \overline{)65}$

6 $6 \overline{)78}$


9 $4 \overline{)96}$

C Answer these questions:

☆ Divide 56 fish equally among 4 seals. How many fish each? $\begin{array}{r} 14 \\ 4 \overline{)56} \end{array}$

1 Divide 45 sweets equally among 3 children. How many sweets each?

2 Share 60 felt pens equally among 5 children. How many pens each?



3 Sweets are packed in bags of 3. How many bags can be filled with 78 sweets?

4 Eggs are packed in sixes. How many packs can be made with 78 eggs?

5 There are 4 wheels on each car. How many cars are made when 92 wheels are used?

6 There are 5 crayons in each box. How many boxes can be filled with 60 crayons?

7 2 eyes are fitted to each doll. How many dolls are made when 94 eyes are fitted?