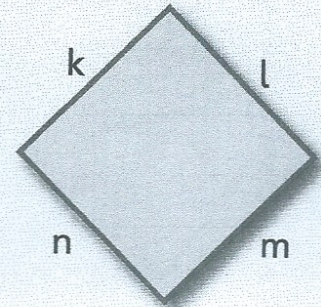


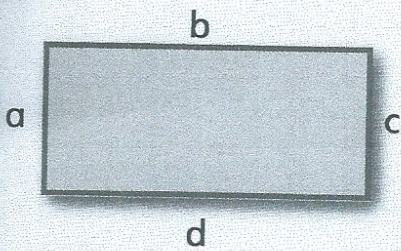


Parallel and perpendicular

SPM2.6a



Write the letters of the sides that are:

- | | | |
|----------------------|----------------------|-------------------|
| 1 parallel to b | 2 perpendicular to m | 3 parallel to r |
| 4 perpendicular to a | 5 parallel to f | 6 parallel to c |
| 7 perpendicular to k | 8 parallel to h | 9 parallel to s |
| 10 parallel to j | 11 parallel to d | 12 parallel to q. |